

Addition and subtraction

Name: _____

1. Look at the following picture and answer the questions that follow.





- 1.1 How **many objects** are there in the box? _____
- 1.2 How many would there be if you added 1 more? _____
- 1.3 How many would there be if you added 2 more? _____
- 1.4 How many would there be if you took 1 away? _____
- 1.5 How many would there be if you took 4 away? _____

2. Complete:


2.1 $10 = 5 + \square$	2.2 $4 + 4 = \square$	2.3 $8 - 5 = \square$
2.4 $1 + 5 = \square$	2.5 $7 + 2 = \square$	2.6 $7 - 4 = \square$
2.7 $3 + 4 = \square$	2.8 $6 + 3 = \square$	2.9 $5 - 5 = \square$

3. Write the answer inside the box.

3.1 
 $7 - 3 = \square$

3.2 
 $4 + 3 = \square$

3.3 How many wheels altogether?


 $3 + 3 + 3 = \square$